



Solve each problem using a tape diagram.

Answers

- 1) There were 52 people on the train. At the first stop 15 people got off. How many people are left on the train?

- 2) Tom had 85 cherries. He ate 35 of them. How many cherries does Tom have left?

- 3) While playing a game Cody had 68 lives. He lost 24 lives on a hard level. How many lives does he have left?

- 4) A chef has 60 cherries. He sets aside 47 of them to make a pie. How many cherries would he still have?

- 5) A pet store had 71 gerbils. If they sold 27 of them, how many would they have left?

- 6) Adam owned 75 video games for his Playstation and Xbox. 34 of the games were for Xbox. How many games does Adam have for playstation?

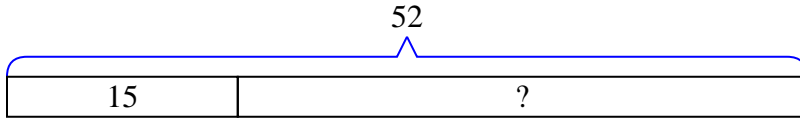
- 7) Rachel went to the fair with \$52 to spend. She spent \$11 on rides. How much money does she have left?

1. _____
2. _____
3. _____
4. _____
5. _____
6. _____
7. _____

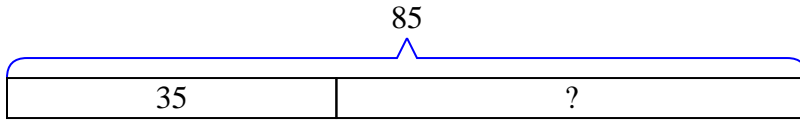


Solve each problem using a tape diagram.

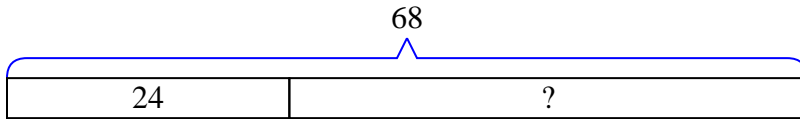
- 1) There were 52 people on the train. At the first stop 15 people got off. How many people are left on the train?



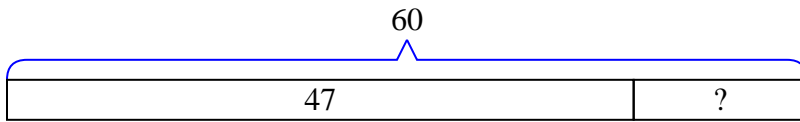
- 2) Tom had 85 cherries. He ate 35 of them. How many cherries does Tom have left?



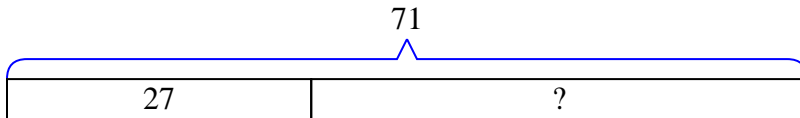
- 3) While playing a game Cody had 68 lives. He lost 24 lives on a hard level. How many lives does he have left?



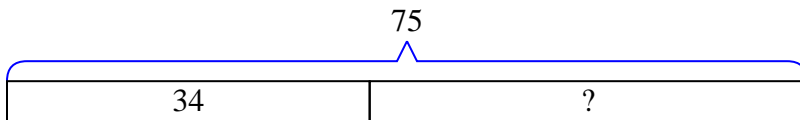
- 4) A chef has 60 cherries. He sets aside 47 of them to make a pie. How many cherries would he still have?



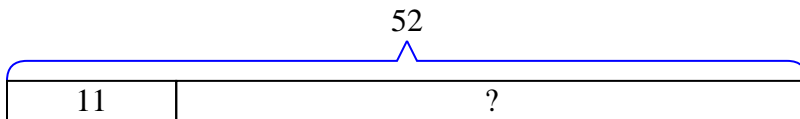
- 5) A pet store had 71 gerbils. If they sold 27 of them, how many would they have left?



- 6) Adam owned 75 video games for his Playstation and Xbox. 34 of the games were for Xbox. How many games does Adam have for playstation?



- 7) Rachel went to the fair with \$52 to spend. She spent \$11 on rides. How much money does she have left?

Answers1. 372. 503. 444. 135. 446. 417. 41